

Name _____

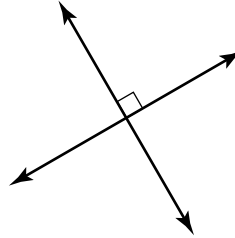
Points, Lines, and Planes

Use geometric terms to describe what is shown. Be as specific as possible.

1.



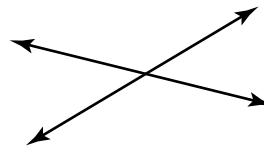
2.



3.



4.



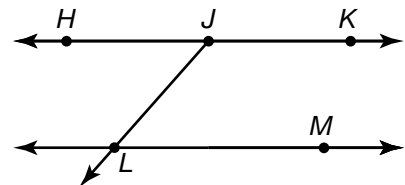
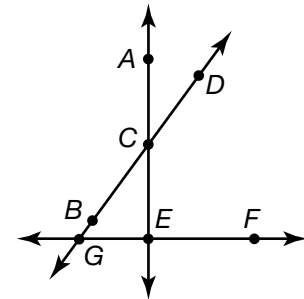
For 5–7, use the diagrams to the right.

5. Name two lines.

6. Name two lines that are perpendicular.

7. Which two lines are parallel?

- A \overleftrightarrow{HK} and \overleftrightarrow{JL}
- B \overleftrightarrow{HJ} and \overleftrightarrow{JL}
- C \overleftrightarrow{HJ} and \overleftrightarrow{JK}
- D \overleftrightarrow{HJ} and \overleftrightarrow{LM}



8. **Writing to Explain** Describe a point.

